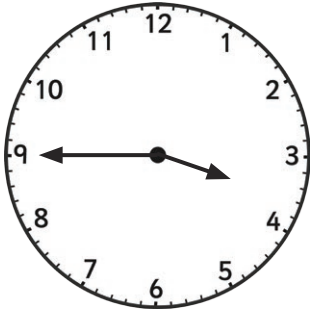


Read, Write and Compare the Time: Before and After

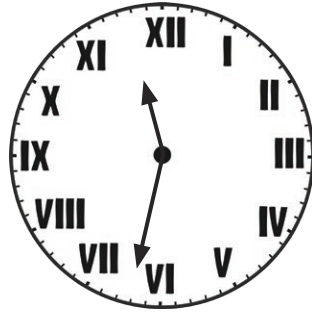
I can convert between units of time (ACMMG085).

I can use 'a.m.' and 'p.m.' notation to solve simple time problems. (ACMMG086)


Read the clock and work out the time before or after. Write your answer in digital format.



Twenty minutes
after



One hour and sixty
minutes before



Three hours and thirty
minutes after



Ninety minutes
before

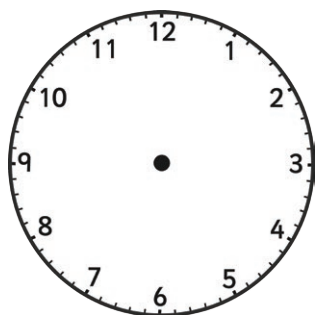


One hour and fifteen
minutes after

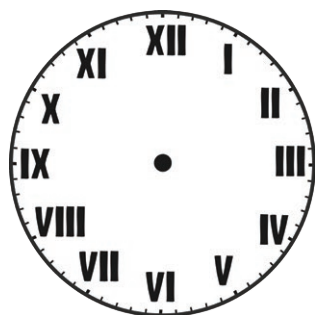


93 minutes
before

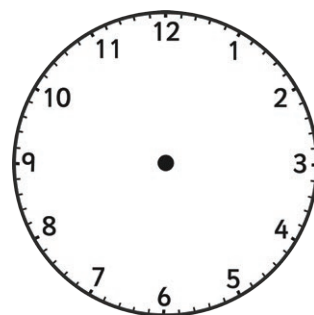
Draw or write the time on the clock.



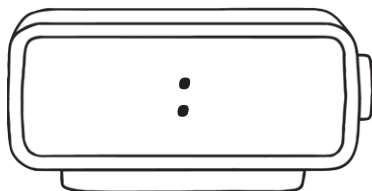
Twenty minutes after
2:52



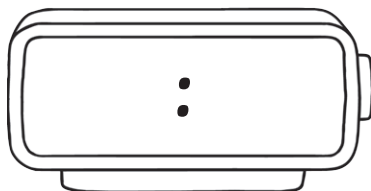
One hour and twenty
minutes before 5:19



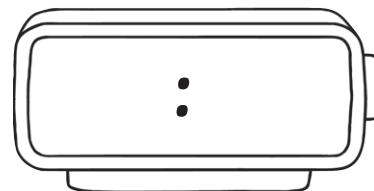
5 hours and 40 minutes
after 7:44



Eighty minutes before
10:15



Two hours and forty-six
minutes before 8:04



104 minutes after
10:42

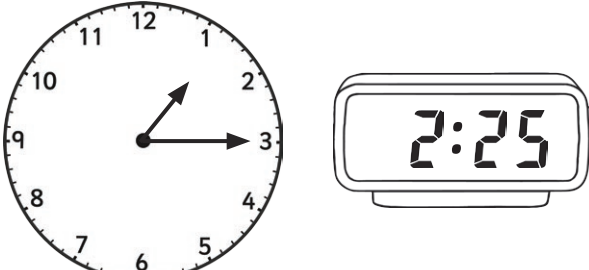
Read, Write and Compare the Time: What's the Difference?

All clocks show the time on the same day unless indicated.

Write the difference between each pair of clocks in:

- a) hours and minutes
- b) minutes alone


Afternoon



a) _____

b) _____


Morning



a) _____

b) _____

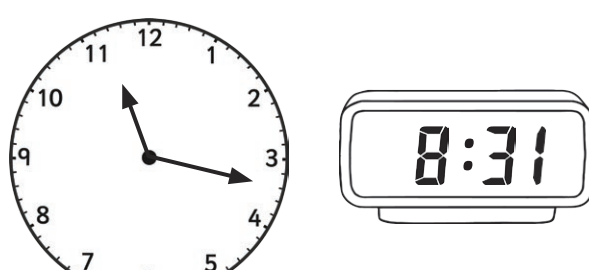
Morning



a) _____

b) _____

Evening



a) _____

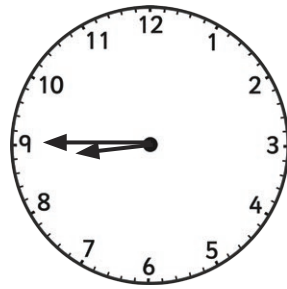
b) _____



Afternoon

a) _____


b) _____



Morning

a) _____

b) _____




The next day

Evening

a) _____

b) _____



The previous day

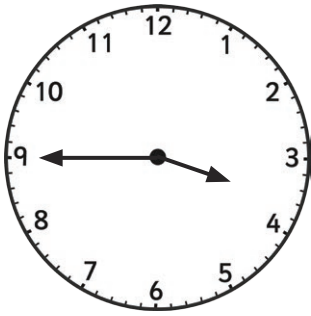
Morning

a) _____

b) _____

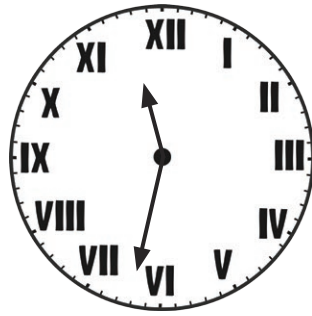
Read, Write and Compare the Time: Before and After Answers

Read the clock and work out the time before or after. Write your answer in digital format.




Twenty minutes
after

4:05



One hour and sixty
minutes before

11:37




Three hours and thirty
minutes after

11:34



Ninety minutes
before

12:53



One hour and fifteen
minutes after

6:00




93 minutes
before

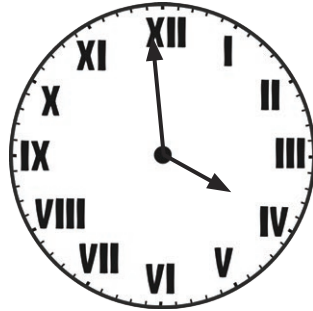
2:38

Read, Write and Compare the Time: Before and After Answers


Draw or write the time on the clock.



Twenty minutes after
2:52



One hour and twenty
minutes before 5:19



5 hours and 40 minutes
after 7:44



Eighty minutes before
10:15



Two hours and forty-six
minutes before 8:04



104 minutes after
10:42

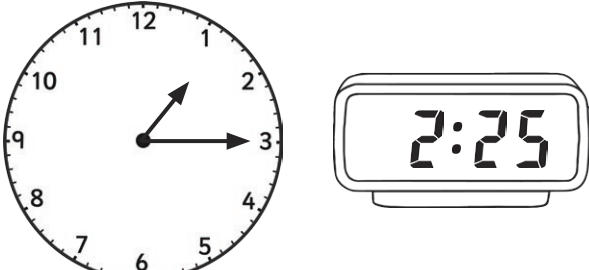
Read, Write and Compare the Time: What's the Difference? Answers

All clocks show the time on the same day unless indicated.

Write the difference between each pair of clocks in:


- a) hours and minutes
- b) minutes alone

Afternoon




a) **1 hour 10 minutes**
b) **70 minutes**

Morning



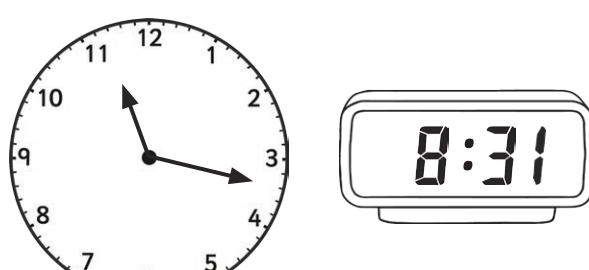
a) **2 hours 14 minutes**
b) **134 minutes**

Morning



a) **44 minutes**
b) **44 minutes**

Evening



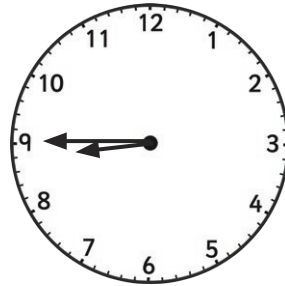
a) **2 hours 46 minutes**
b) **166 minutes**

Read, Write and Compare the Time: What's the Difference? Answers




Afternoon

- a) 4 hours 51 minutes
- b) 291 minutes



Morning


- a) 6 hours 25 minutes
- b) 385 minutes



The next day

Evening

- a) 9 hours 50 minutes
- b) 590 minutes



The previous day

Morning

- a) 13 hours 10 minutes
- b) 790 minutes